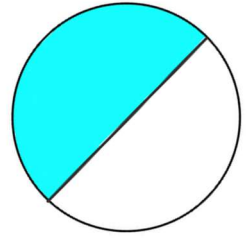
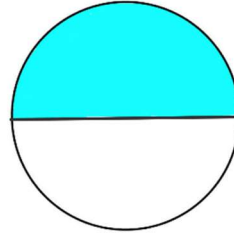
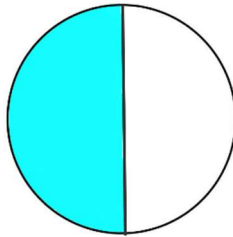


Fractions - Entry Two

How to Guide - ANSWERS

Question 1

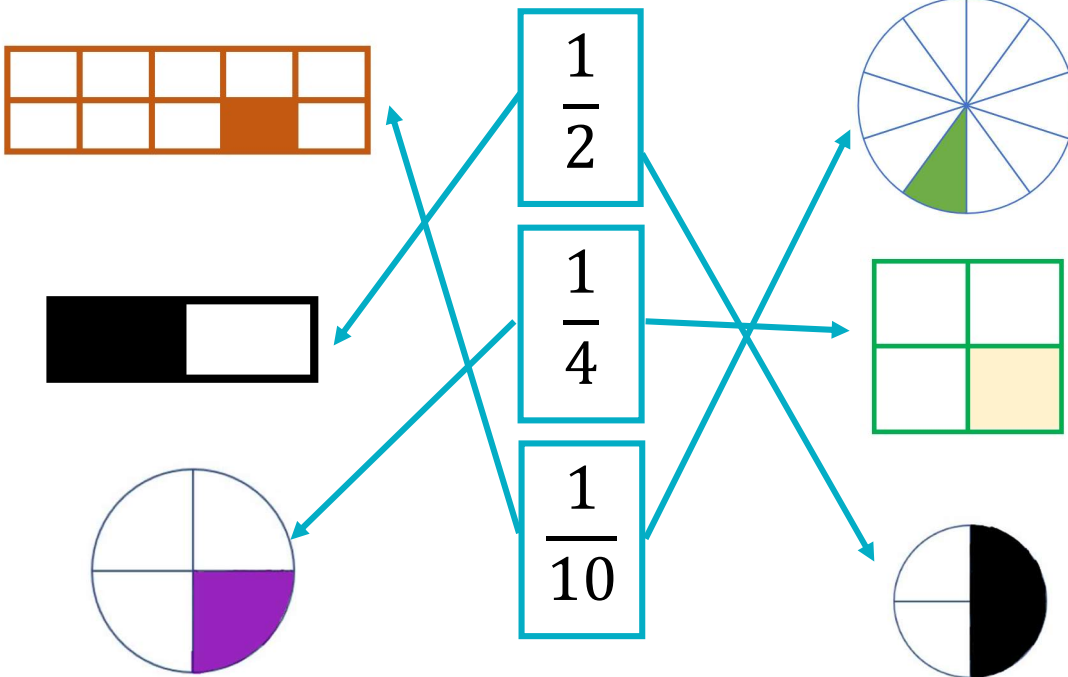
Shade in $\frac{1}{2}$ of this shape.



Any shading of half of the shape is acceptable

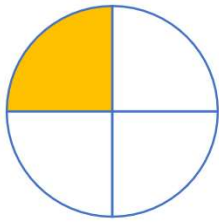
Question 2

Draw arrows to match the shapes to the fractions.



Question 3


What fraction of each shape is shaded?



One quarter or $\frac{1}{4}$



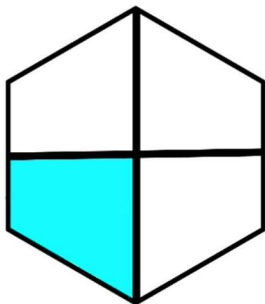
One half or $\frac{1}{2}$



One half or $\frac{1}{2}$



One tenth or $\frac{1}{10}$



One quarter or $\frac{1}{4}$