


# Time - Entry Two

## How to Guide - ANSWERS

### Question 1

What time is it? **9 o'clock**

- a) 3 o'clock
- b) 9 o'clock**
- c) eight o'clock



### Question 2

Draw an arrow to match the clock with the time.


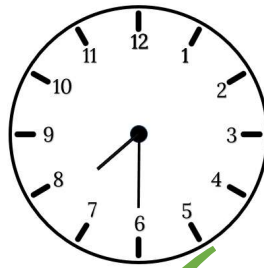

A matching exercise consisting of five analog clocks on the left and five time labels in boxes on the right. Red arrows connect each clock to its corresponding time label. The connections are: Clock 1 (hour hand at 11, minute hand at 12) to 'Eleven o'clock'; Clock 2 (hour hand at 3, minute hand at 12) to 'Three o'clock'; Clock 3 (hour hand at 6, minute hand at 12) to 'Six o'clock'; Clock 4 (hour hand at 1, minute hand at 12) to 'One o'clock'; Clock 5 (hour hand at 8, minute hand at 12) to 'Eight o'clock'.

Five analog clocks are shown, each with a different time. Red arrows connect each clock to a corresponding time label in a box on the right.

- Top clock: hour hand at 11, minute hand at 12. Arrow points to **Eleven o'clock**.
- Second clock: hour hand at 3, minute hand at 12. Arrow points to **Three o'clock**.
- Third clock: hour hand at 6, minute hand at 12. Arrow points to **Six o'clock**.
- Fourth clock: hour hand at 1, minute hand at 12. Arrow points to **One o'clock**.
- Bottom clock: hour hand at 8, minute hand at 12. Arrow points to **Eight o'clock**.


### Question 3

Which clock shows half past seven? Tick your answer




### Question 4

What time are these clocks showing?



Answer box:

Half past three




Answer box:

Half past ten



Answer box:

Half past






Answer box:

Half past twelve


### Question 5

Which clock shows quarter past four? Tick your answer



### Question 6

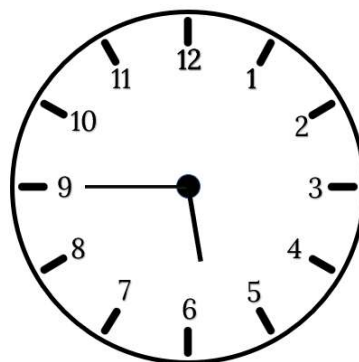
Show the time quarter past 2 on the clock below.



### Question 7

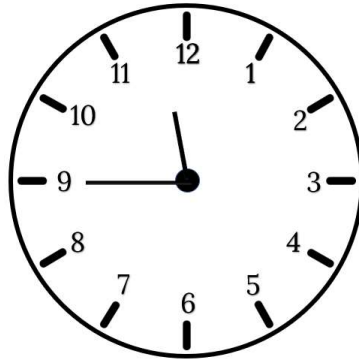
What time does this clock show?

- a) Quarter to 7
- b) Quarter to 6
- c) Quarter past 6




### Question 8

Show the time quarter to twelve on the clock below.



### Question 9

What time are these clocks showing?



Answer box:

Two o'clock




Answer box:

Half past five



Answer box:

Quarter past ten



Answer box:

Quarter to one

### Question 10

Complete the digital clocks with the 24-hour time.

9pm

21:00

6am

06:00

1pm

13:00

3pm

15:00

7am

07:00

5pm

17:00

### Question 11

True or False? Circle your answer.

a) 15:00 is in the morning.

TRUE

or

FALSE

b) 19:00 is the same as 9pm.

TRUE

or

FALSE

c) 5pm is the same as 17:00.

TRUE

or

FALSE